







Maths Forest and Woodland Counting Treasure Hunt

Can you find all the hidden forest and woodland animal pictures?
Count how many are on each card and write the numeral in the box.



1 2 3 4 5 6 7 8 9 10